

Finite-State Machines and Regular Languages

Detmar Meurers: Intro to Computational Linguistics I
OSU, LING 684.01

Some useful tasks involving language

- Find all phone numbers in a text, e.g., occurrences such as
When you call (614) 292-8833, you reach the fax machine.
- Find multiple adjacent occurrences of the same word in a text, as in
I read the the book.
- Determine the language of the following utterance: French or Polish?
Czy pasazer jadacy do Warszawy moze jechac przez Londyn?

2

More useful tasks involving language

- Look up the following words in a dictionary:
laughs, became, unidentifiable, Thatcherization
 - Determine the part-of-speech of words like the following, even if you can't find them in the dictionary:
conurbation, cadence, disproportionality, lyricism, parlance
- ⇒ Such tasks can be addressed using so-called finite-state machines.
⇒ How can such machines be specified?

3

Regular expressions

- A regular expression is a description of a set of strings, i.e., a language.
- They can be used to search for occurrences of these strings
- A variety of unix tools (grep, sed), editors (emacs), and programming languages (perl, python) incorporate regular expressions.
- Just like any other formalism, regular expressions as such have no linguistic contents, but they can be used to refer to linguistic units.

4

The syntax of regular expressions (1)

Regular expressions consist of

- strings of characters: `c, A100, natural language, 30 years!`
- disjunction:
 - ordinary disjunction: `devoured|ate, famil(y|ies)`
 - character classes: `[Tt]he, bec[oa]me`
 - ranges: `[A-Z]` (a capital letter)
- negation: `[^a]` (any symbol but a)
`[^A-Z0-9]` (not an uppercase letter or number)

5

The syntax of regular expressions (2)

- counters
 - optionality: `?`
`colou?r`
 - any number of occurrences: `*` (Kleene star)
`[0-9]* years`
 - at least one occurrence: `+`
`[0-9]+ dollars`
- wildcard for any character: `.`
`beg.n` for any character in between `beg` and `n`

6

The syntax of regular expressions (3)

Operator precedence, from highest to lowest:

parentheses `()`
counters `* + ?`
character sequences
disjunction `|`

Note: The various unix tools and languages differ w.r.t. the exact syntax of the regular expressions they allow.

7

Regular languages

How can the class of regular languages which is specified by regular expressions be characterized?

Let Σ be the set of all symbols of the language, the alphabet, then:

1. $\{\}$ is a regular language
2. $\forall a \in \Sigma: \{a\}$ is a regular language
3. If L_1 and L_2 are regular languages, so are:
 - (a) the concatenation of L_1 and L_2 : $L_1 \cdot L_2 = \{xy | x \in L_1, y \in L_2\}$
 - (b) the union of L_1 and L_2 : $L_1 \cup L_2$
 - (c) the Kleene closure of L : $L^* = L^0 \cup L^1 \cup L^2 \cup \dots$ where L^i is the language of all strings of length i .

8

Properties of regular languages

The regular languages are closed under (L_1 and L_2 regular languages):

- concatenation: $L_1 \cdot L_2$
set of strings with beginning in L_1 and continuation in L_2
- Kleene closure: L_1^*
set of repeated concatenation of a string in L_1
- union: $L_1 \cup L_2$
set of strings in L_1 or in L_2
- complementation: $\Sigma^* - L_1$
set of all possible strings that are not in L_1
- difference: $L_1 - L_2$
set of strings which are in L_1 but not in L_2

9

- intersection: $L_1 \cap L_2$
set of strings in both L_1 and L_2
- reversal: L_1^R
set of the reversal of all strings in L_1

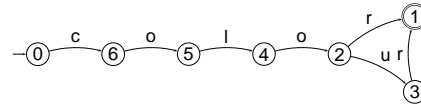
10

Finite state machines

Finite state machines (or automata) (FSM, FSA) recognize or generate regular languages, exactly those specified by regular expressions.

Example:

- Regular expression: colour?r
- Finite state machine:



11

Defining finite state automata

A **finite state automaton** is a quintuple (Q, Σ, E, S, F) with

- Q a finite set of states
- Σ a finite set of symbols, the alphabet
- $S \subseteq Q$ the set of start states
- $F \subseteq Q$ the set of final states
- E a set of edges $Q \times (\Sigma \cup \{\epsilon\}) \times Q$

The **transition function** d can be defined as

$$d(q, a) = \{q' \in Q \mid \exists (q, a, q') \in E\}$$

12

Language accepted by an FSA

The extended set of edges $\hat{E} \subseteq Q \times \Sigma^* \times Q$ is the smallest set such that

- $\forall (q, \sigma, q') \in E : (q, \sigma, q') \in \hat{E}$
- $\forall (q_0, \sigma_1, q_1), (q_1, \sigma_2, q_2) \in \hat{E} : (q_0, \sigma_1\sigma_2, q_2) \in \hat{E}$

The **language L(A)** of a finite state automaton **A** is defined as

$$L(A) = \{w \mid q_s \in S, q_f \in F, (q_s, w, q_f) \in \hat{E}\}$$

13

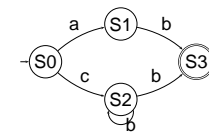
Finite state transition networks (FSTN)

Finite state transition networks are graphical descriptions of finite state machines:

- nodes represent the states
 - start states are marked with a short arrow
 - final states are indicated by a double circle
- arcs represent the transitions

14

Example for a finite state transition network



Regular expression specifying the language generated or accepted by the corresponding FSM: $ab \mid cb^+$

15

Finite state transition tables

Finite state transition tables are an alternative, textual way of describing finite state machines:

- the rows represent the states
 - start states are marked with a dot after their name
 - final states with a colon
- the columns represent the alphabet
- the fields in the table encode the transitions

16

The example specified as finite state transition table

	a	b	c	d
S0.	S1			S2
S1		S3:		
S2		S2,S3:		
S3:				

17

Some properties of finite state machines

- Recognition problem can be solved in linear time (independent of the size of the automaton).
- There is an algorithm to transform each automaton into a unique equivalent automaton with the least number of states.

18

Deterministic Finite State Automata

A finite state automaton is deterministic iff it has

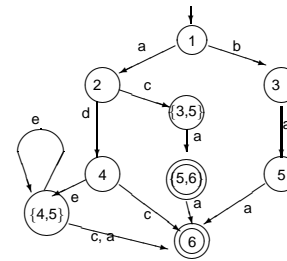
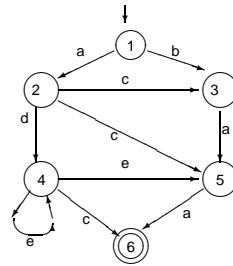
- no ϵ transitions and
- for each state and each symbol there is at most one applicable transition.

Every non-deterministic automaton can be transformed into a deterministic one:

- Define new states representing a disjunction of old states for each non-determinacy which arises.
- Define arcs for these states corresponding to each transition which is defined in the non-deterministic automaton for one of the disjuncts in the new state names.

19

Example: Determinization of FSA



20

From Automata to Transducers

Needed: mechanism to keep track of path taken

A **finite state transducer** is a 6-tuple $(Q, \Sigma_1, \Sigma_2, E, S, F)$ with

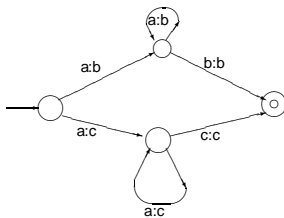
- Q a finite set of states
- Σ_1 a finite set of symbols, the input alphabet
- Σ_2 a finite set of symbols, the output alphabet
- $S \subseteq Q$ the set of start states
- $F \subseteq Q$ the set of final states
- E a set of edges $Q \times (\Sigma_1 \cup \{\epsilon\}) \times Q \times (\Sigma_2 \cup \{\epsilon\})$

21

Transducers and determinization

A finite state transducer understood as consuming an input and producing an output cannot generally be determinized.

Example:



22

Summary

- Notations for characterizing regular languages:
 - Regular expressions
 - Finite state transition networks
 - Finite state transition tables
- Finite state machines and regular languages: Definitions and some properties
- Finite state transducers

23

Reading assignment 2

- Chapter 1 "Finite State Techniques" of course notes
- Chapter 2 "Regular expressions and automata" of Jurafsky and Martin (2000)

24